


# Tell the Time: Writing the Time


Write the time shown on each clock.



\_\_\_\_\_



\_\_\_\_\_




\_\_\_\_\_




\_\_\_\_\_




\_\_\_\_\_




\_\_\_\_\_




\_\_\_\_\_




\_\_\_\_\_




\_\_\_\_\_




\_\_\_\_\_




\_\_\_\_\_



\_\_\_\_\_




\_\_\_\_\_




\_\_\_\_\_




\_\_\_\_\_



\_\_\_\_\_




\_\_\_\_\_




\_\_\_\_\_




\_\_\_\_\_




\_\_\_\_\_




\_\_\_\_\_



\_\_\_\_\_




\_\_\_\_\_



\_\_\_\_\_

# Tell the Time: Drawing the Time


Draw the time on each clock.




9 o'clock




half past 3




6 o'clock




half past 4




quarter past 2




half past 1




quarter to 11




11 o'clock




half past 2



5 o'clock



quarter past 1




half past 5




quarter to 8




3 o'clock




half past 6




quarter to 1



half past 7




quarter past 8




10 o'clock




half past 12




quarter past 11



quarter to 4



half past 6



2 o'clock