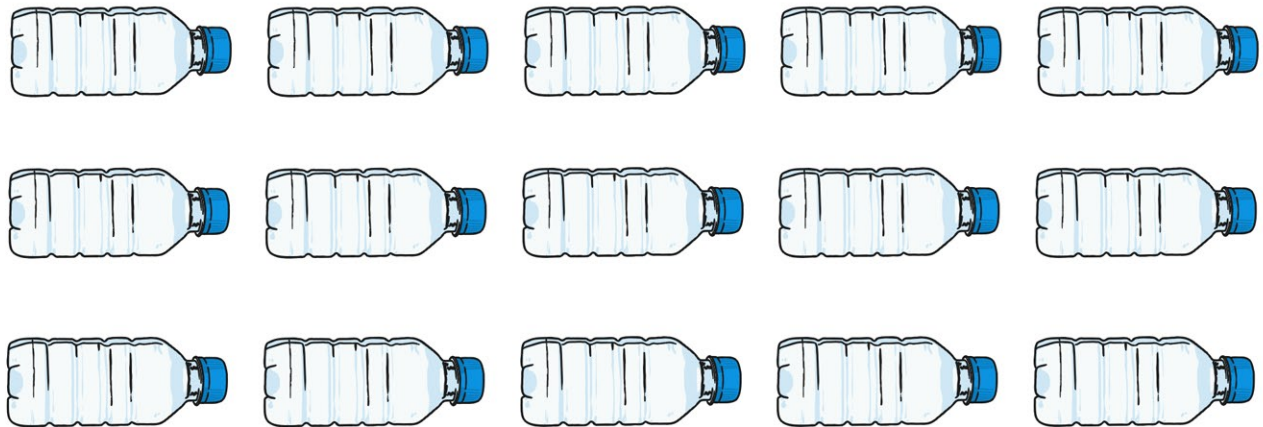



1. Michelle buys 15 bottles of water. She shares them equally between her three children. How many do they each get?




2. A shop has 40 sausage rolls on sale. If five friends buy them and share them equally, how many do they each get?



3. Jessica buys 14 bread rolls. She has two every day. How many days will she have bread rolls for?




4. Amaan loves apples. He eats three every day. How many days will 30 apples last for?



5. Dan gives his five children their pocket money to spend at the shop. He has £20. How much would each child get if they shared the money equally?




6. Sidra bought a bag of 50 chicken nuggets and eats 5 of them for each meal. How many meals will the bag last for?



7. Phil bought 35 mini cakes for a birthday party. Four other children came and shared the cakes equally with Phil. How many cakes did each child get?



8. A punnet has 24 strawberries in it. How many strawberries would two people get each if they shared them equally?



Food Division Answers

Q1) Michelle buys 15 bottles of water. She shares them equally between her three children. How many do they each get?

5 bottles of water each

Q2) A shop has 40 sausage rolls on sale. If five friends buy them and share them equally, how many do they each get?

8 sausage rolls each

Q3) Jessica buys 14 bread rolls. She has two every day. How many days will she have bread rolls for?

7 days

Q4) Amaan loves apples. He eats three every day. How many days will 30 apples last for?

10 days

Q5) Dan gives his five children their pocket money to spend at the shop. He has £20. How much would each child get if they shared the money equally?

£4 each

Q6) Sidra bought a bag of 50 chicken nuggets and eats 5 of them for each meal. How many meals will the bag last for?

10 meals

Q7) Phil bought 35 mini cakes for a birthday party. Four other children came and shared the cakes equally with Phil. How many cakes did each child get?

7 cakes each

Q8) A punnet has 24 strawberries in it. How many strawberries would two people get each if they shared them equally?

12 strawberries each