






















# Compass Directions

		bakery 			mosque 	
church 		park 		hospital 		
	taxi rank 		postbox 			cafe 
fire station 		toy shop 		airport 		
	school 		vet 		pool 	
theme park 		police station 				beach 
bus stop 		dentist 			supermarket 	

## Compass directions: the town

1. From the start, go north 4 squares. Where are you now?
2. Go east 3 squares. Where are you now?
3. Go south 3 squares. Where are you now?
4. Go west 6 squares. Where are you now?
5. Go east 2 squares. Where are you now?
6. Start at the school. How do you get to the taxi rank?
7. Give directions from the dentist to the toy shop.

