





1. James has 6 bread rolls. He shares them equally with his sister. How many do they have each?



2. Evie buys 8 oranges at the shop. She shares them equally with her friend. How many oranges do they have each?





**3.** Imran has 10 ice creams. He eats two every day.  
How many days will his ice creams last?



**4.** Ben has 2 bottles of water. He shares them with his friend.  
How many bottles do they each have?






**5.** A shop has 4 bags of crisps. Two people want to buy them. How many bags can they each buy if they are shared equally?



**6.** Javeria has 12 potatoes. She shares them with her brother. How many do they have each?





7. Olivia buys 15 boxes of cereal for her and her two brothers. They share them equally. How many boxes of cereal will they have each?



8. Amy buys 10 cupcakes. She shares them equally with her sister. How many cupcakes do they each have?



# Food Division Answers

- Q1) James has 6 bread rolls. He shares them equally with his sister. How many do they have each?  
**3 bread rolls each**
- Q2) Evie buys 8 oranges at the shop. She shares them equally with her friend. How many oranges do they have each?  
**4 oranges each**
- Q3) Imran has 10 ice creams. He eats two every day. How many days will his ice creams last?  
**5 days**
- Q4) Ben has 2 bottles of water. He shares them with his friend. How many bottles do they each have?  
**1 each**
- Q5) A shop has 4 bags of crisps. Two people want to buy them. How many bags can they each buy if they are shared equally?  
**2 bags each**
- Q6) Javeria has 12 potatoes. She shares them with her brother. How many do they have each?  
**6 potatoes each**
- Q7) Olivia buys 15 boxes of cereal for her and her two brothers. They share them equally. How many boxes of cereal will they have each?  
**5 boxes each**
- Q8) Amy buys 10 cupcakes. She shares them equally with her sister. How many cupcakes do they each have?  
**5 cupcakes each**